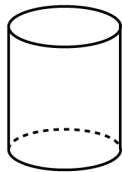


Mathematica Centrum

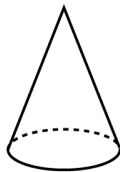
Together, let's shape the mathematicians of the future

PYTHAGORAS PREPARATORY TEST 2017 DETAILED SOLUTIONS

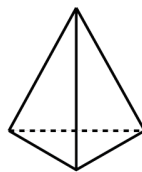
1. $3 + 1 + 6 = 10$
2. The solid that has 4 flat faces, 6 edges and 4 vertices is C.



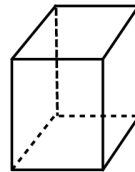
A



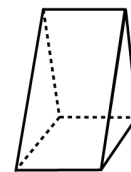
B



C

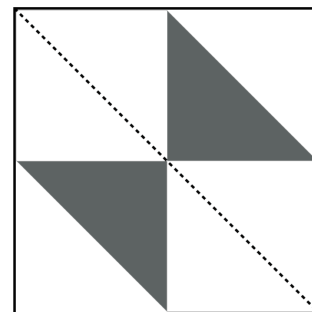


D

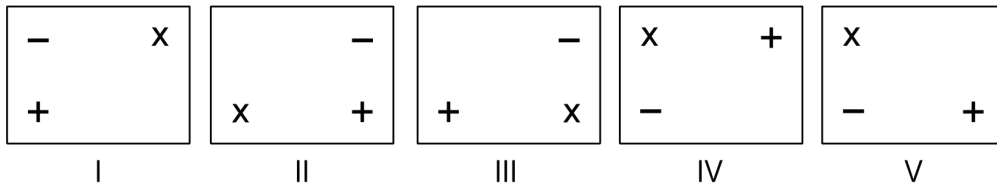


E

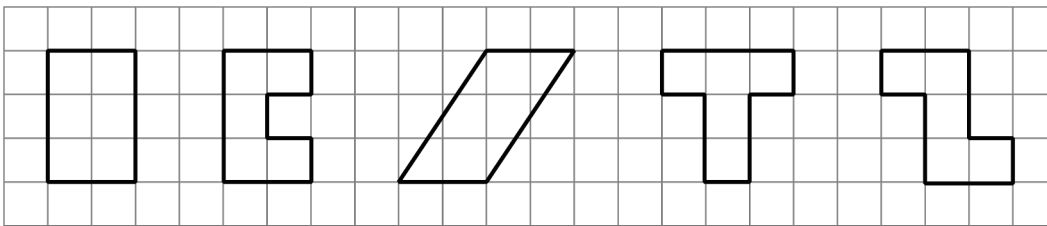
3. The product that has the smallest ones digit is $3 \times 4 \times 5$. Its ones digit is 0.
4. $20 \div (7 - 5) = 20 \div 2 = 10$.
5. There are 5 odd numbers (21, 23, 25, 27, and 29) between 19 and 31.
6. The value of X in the equation: $512 = 317 + X$ is $(512 - 317)$ 195.
7. The answer is 11 000.
8. 10 nickels = $50\phi = 2$ quarters.
9. Andrea counted backwards from 30 by 3's. Andrea counted 30, 27, 24, 21, 18, 15, 12, 9, The numbers that were not counted by Andrea are 8 and 14.
10. An answering machine can store 10 minutes or (10×60) 600 seconds of messages. It could store $(600 \div 20)$ thirty 20 second messages.
11. $77 - 7 = 70$. $70 \div 7 = 10$ and $10 - 1 = 9$. There are 9 natural numbers between 7 and 77 that are multiples of 7.
12. The square is composed of 8 identical triangles. Two are shaded. Two out of 8 triangles are shaded. This represents $1/4$ of the figure.



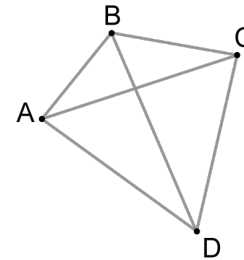
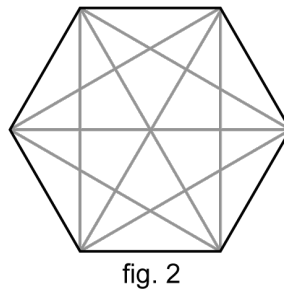
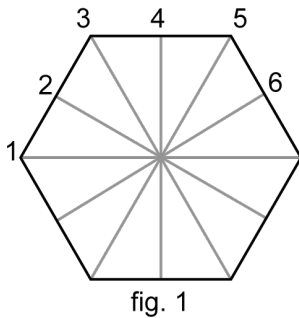
13. Figures III and IV are 180° rotation images of each other. When a figure is turned 180°, everything is reversed. The top becomes the bottom, the left becomes the right and vice versa. For example, look at the + symbol in figure III. It is at the bottom of the rectangle and on the left side. In figure IV, the + symbol is at the top of the rectangle and on the right side.



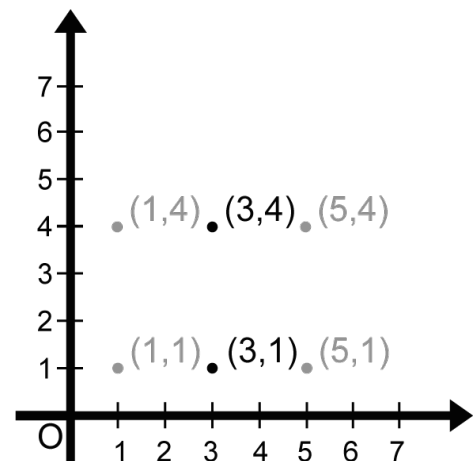
14. $1 \text{ dm} + 20 \text{ mm} = 10 \text{ cm} + 2 \text{ cm} = 12 \text{ cm}$.
15. The second, the fourth and the fifth figures all have a perimeter of 12.




16. The number of lines of symmetry (6) shown in fig.1 plus the number of diagonals (9) shown in fig.2 is equal to 15.



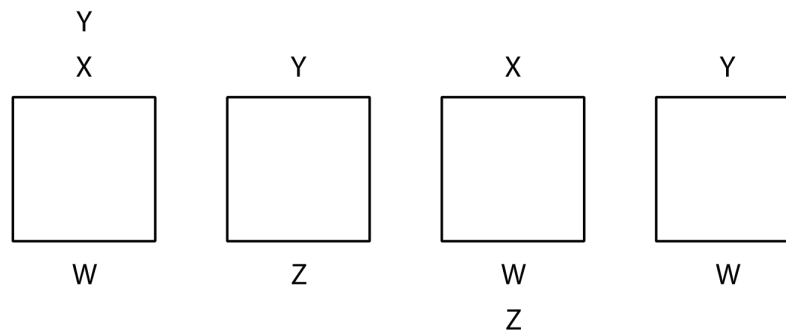
17. There are six 4-digit natural numbers between 1 000 and 2 000. These are 1 234, 1 243, 1 324, 1 342, 1 432, and 1 423. By symmetry, we know that there are 6 between 2 000 and 3 000 and 6 more between 3 000 and 4 000. In all, there are 18 such numbers.
18. Using point A, you can draw 3 line segments: AB, AC, and AD. Using point B, you can draw only 2 line segments: BC and BD (line segment BA is already drawn). Using point C, you can draw only 1 line segment: CD. Using the 4 points in the diagram, you can draw $(3 + 2 + 1)$ 6 line segments.
19. The coordinates of the other two vertices of the rectangle could be $(1, 1)$, $(1, 4)$, $(5, 1)$, and $(5, 4)$. The coordinates could not be $(2, 3)$.



20. Each term of the second series: $9 + 18 + 27 + 36 + 45 + \dots + 900$ is $(9/3)$ 3 times larger than the corresponding term of the first series: $3 + 6 + 9 + 12 + 15 + \dots + 300$. The second series is equal to $(15 \times 150 \times 3)$ 45 450.
21. You can form $(1 \times 24, 2 \times 12, 3 \times 8, \text{ and } 4 \times 6)$ 4 different rectangles whose areas are 24 cm^2 .
22. If $1 \text{ tic} = 3 \text{ tocs}$ and $1 \text{ toc} = 3 \text{ tacs}$, then 3 tics are equal to $(3 \times 3 \text{ tocs})$ 9 tocs and 9 tocs are equal to $(9 \times 3 \text{ tacs})$ 27 tacs.
23. A square table can sit 4 people. If you line up 5 square tables, as shown in the diagram, you can sit 12 people. If 100 square tables were lined up in the same manner, you could sit $(100 \times 2 + 2)$ 202 people.

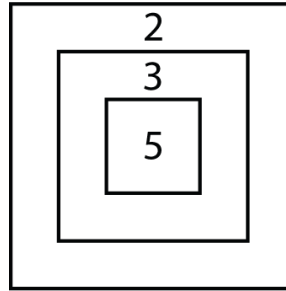


24. Four friends W, X, Y, and Z are walking in a straight line. Y is not second. X is right behind Y. Z is right behind W, who is not third. Taking into account all of these constraints, we can draw the diagram below. We can see in this diagram, that only Y or Z can be third. Z cannot be third because the constraints of the problem are not respected. Indeed if Z were third, X could not be right behind Y because W would have to be second. Y must be third. This hypothesis does take into account the constraints of the problem.



25. The prime factorisation of 36 is $2 \times 2 \times 3 \times 3$. Combining these prime factors, we must find 3 natural numbers between 1 and 10 whose product is 36. These 3 natural numbers can only be 2, 3, and 6 (2×3) . The sum of these three numbers is $(2 + 3 + 6)$ 11.
26. $2^1 = 2, 2^2 = 4, 2^3 = 8, 2^4 = 16, 2^5 = 32, 2^6 = 64, \dots$. The ones' digit of a power of 2 can only be 2, 4, 8, or 6. The sequence of the ones' digits of a power of 2 can be written as: 2, 4, 8, 6, 2, 4, 8, 6, \dots . The same digit reappears periodically 4 terms further in the sequence. The ones' digit of 2^8 is 6.
27. If $3/10 \times N = 1/2$, then the number $N = 1/2 \div 3/10$. N is equal to $(1/2 \times 10/3)$ $10/6$ or $5/3$.
28. There are 3 prime numbers (41, 43, and 47) between 40 and 50. The average of the two prime numbers closest to 42 is $(41 + 43 = 84 \text{ and } 84 \div 2 = 42)$ 42.
29. All the numbers except 30 (5×6) are multiples of 7 $(21 = 3 \times 7, 35 = 5 \times 7, 70 = 10 \times 7, \text{ and } 49 = 7 \times 7)$.
30. Mathew's car is travelling at 100 km/h. In 90 minutes or 1.5 hours, it can cover (1.5×100) 150 km.

31. Matusalem had seven shots and scored 28 points. He could not have hit the 5-point area 5 times or more because $5 \times 5 = 25$ and this would make it impossible to achieve a total of 28 points with two extra hits. He could not have hit the 5-point area 3 times or less because $3 \times 5 + 4 \times 3$ equals 27. He must have hit the 5-point area 4 times. Indeed $4 \times 5 + 2 \times 3 + 1 \times 2 = 28$. He hit the 3-point area twice.



32. There are 60 seconds in a minute. A second is $1/60$ of a minute.

33. The clock shown in the diagram has just lost its minute hand. It lost it at approximately 10:30, because the hour hand is half way between the 10 and the 11. If it were 10:00, the hour hand would be right on the 10. If it were 10:05, the hour hand would be very close to the 10. If it were 10:22, the hour hand would be approximately $1/3$ of the way between the 10 and the 11, and if it were 10:45, the hour hand would be $3/4$ of the way between the 10 and the 11.

