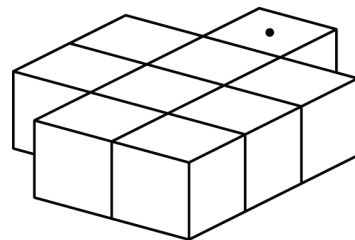
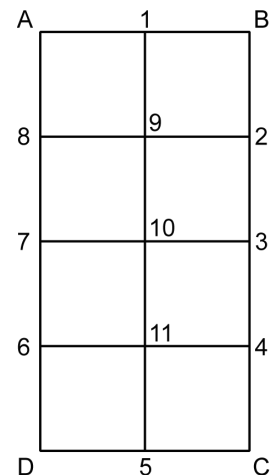


Mathematica Centrum

Together, let's shape the mathematicians of the future

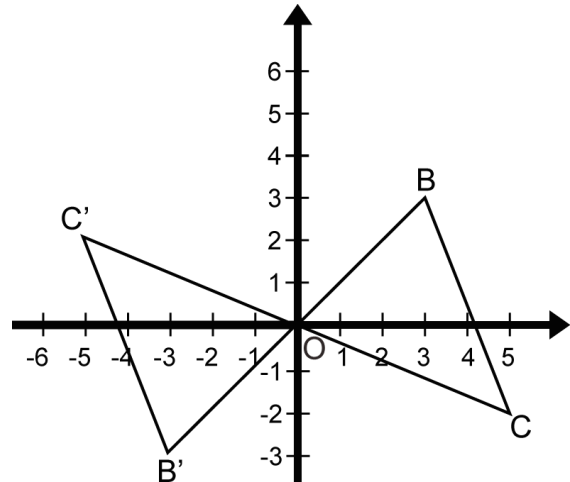
NEWTON PREPARATORY TEST 2016 DETAILED SOLUTIONS

- The prime factors of 333 are $\{3, 3, 37\}$. The largest prime factor of 333 is 37.
- Two of the numbers, 1 and 64, are perfect squares and cubes. Indeed, $64 = 8^2 = 4^3$ and $1 = 1^2 = 1^3$.
- So as not to forget any rectangle, we have numbered the vertices of the possible rectangles. There are 7 rectangles whose bases are 2 units long. These are A-B-2-8, A-B-4-6, A-B-C-D (the original rectangle itself), 8-2-3-7, 8-2-C-D, 7-3-4-6, and 6-4-C-D. There are 12 rectangles which have a base that is 1 unit long. These are A-1-10-7, A-1-11-6, A-1-5-D, 8-9-11-6, 8-9-5-D, 7-10-5-D and their 6 symmetrical rectangles 1-B-3-10, 1-B-4-11, 1-B-C-5, 9-2-4-11, 9-2-C-5, and 10-3-C-5. In all, we can count 19 rectangles.
- Twenty-seven ($3 \times 3 \times 3$) cubes with edges 2 cm long are needed to form a cube with edges 6 cm long.
- The number Z, representing the average of the other four choices, must satisfy the conditions of equation: $Z \times 4 = \text{sum of the other 4}$. This number is -3, because $-3 \times 4 = 4 + (-4) + (-17) + 5$.
- I gave away $1/2 \times 1/3 \times 1/4 = 1/24$.
- The average of all natural numbers from 1 to 2 000 (1 000.5) multiplied by 2 000 will yield the sum sought. This sum is equal to $(1\ 000.5 \times 2\ 000) 2\ 001\ 000$.
- Only one block has only one face that is covered with glue, the one with the dot. Eight blocks have at least two faces that are covered with glue.
- If half of N is 12, N is 24 and $4N$ is equal to 96.
- If c is the length of the side of the square, its area is c^2 . If the length of each side were reduced by 25%, each side of the new square would have a length of $3/4 c$. Then the area of the square would be $9/16 c^2$. Thus the area of the square would be reduced by $(c^2 - 9/16 c^2) 7/16 c^2$. The area would be reduced by $(7/16)$ or 43.75%.



11. The LCM (3, 7) is 21. The GCD (12, 18) is 6.
The product of 21 x 6 is 126.

12. Rotate $\triangle OBC$ 180° about the origin O.
The coordinates of B' (image of B)
are (-3, -3).



13. Mathusalem has lost 40% of his weight during the summer. His weight at the beginning of the summer was $(100 \div 60 \times 100)$ $166 \frac{2}{3}$ kg. Rounded to the nearest kg, his weight at the beginning of the summer was 167 kg.

14. If $\frac{1}{2} + \frac{1}{3} + \frac{1}{n} = \frac{53}{6}$, then $\frac{1}{n} = \frac{53}{6} - \frac{5}{6} = 8$ and $n = \frac{1}{8}$.

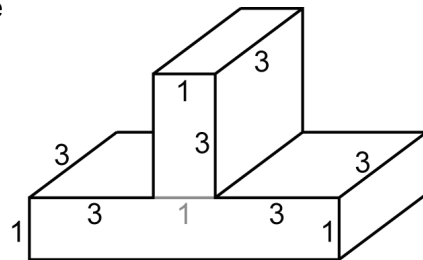
15. The probability that she will choose the yellow sweater and the wool skirt is $(\frac{1}{4} \times \frac{1}{2})$ $\frac{1}{8}$.

16. With one digit, you can form 1 (1^1) natural number, with 2 digits, you can form 4 (2^2) natural numbers, with 3 digits, you can form 3^3 or (27) twenty-seven 3-digit natural numbers.

17. If $P = 10 + 10^2 + 10^3 + 10^4 + 10^5$, the sum of P's digits (111 110) is 5.

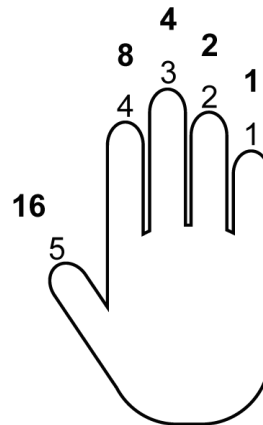
18. The algebraic expression that can generate the sequence of numbers that yield a remainder of 2 when divided by 4 (2, 6, 10, 14, ...) is $4n + 2$.

19. The volume, in cm^3 , of the rectangular solid shown in the diagram is equal to the sum of the volumes of the two rectangular prisms that make up the solid. This volume is equal to $(1 \times 3 \times 3 + 7 \times 3 \times 1)$ 30 cm^3 .



20. If $x = -2$, the value of $-3x + 2x^2 - 2x^3$ is $(-3(-2) + 2(-2)^2 - 2(-2)^3 = 6 + 8 + 16)$ 30.

21. Binary Ben uses the binary system. Finger 1 represents the number 1 (2^0) when it is straight and zero when it is curled. Finger 2 represents the number 2 (2^1) when it is straight and zero when it is curled. When finger 3 is straight, it represents 4 (2^2). When finger 4 is straight it is equal to 8 (2^3), and when finger 5 is straight, it is equal to 16 or 2^4 . When all five fingers are straight, Ben represents the number $(1 + 2 + 4 + 8 + 16)$ 31. To represent the number 7, he must hold fingers 1-2-3 straight. By the way, Binary Ben can represent a total of 32 natural numbers (the numbers from 0 to 31).

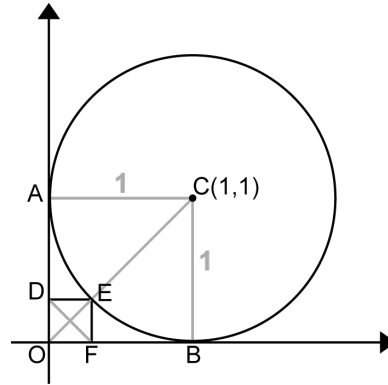


22. The value of A (see figure below) is 1 because if A had a value of 2 or more, the product of the multiplication would give a 5-digit number. Letter B cannot be equal to 0, 2, 4, 6, or 8 because the unit digit of DEDB would be zero. B must be equal to 5 because it is the only odd digit that will yield a unit digit of 5 in the result DEDB. After additional calculations and deductions, it is easy to show that C is equal to 3 and D is equal to 7.

23. The prime factors of 210 are {2, 3, 5, 7}. The number whose 3 digits yield a product of 210 must be composed of 3 digits which have the values 6 (2 x 3), 5, and 7. Even if there are many numbers that are composed of the same 3 digits (567, 756, 657, ...), their sum is always (5 + 6 + 7) 18.

$$\begin{array}{r} A\ B\ C\ B \\ \times \qquad \qquad \qquad 5 \\ \hline D\ E\ D\ B \end{array}$$

24. The diagonals of a square are equal (DF = OE). From $OB^2 + BC^2 = OC^2$, we find that $OC = \sqrt{2}$. The length of diagonal DF of the small square is $(OC - EC) \sqrt{2} - 1$.



25. If X was Mathilda's age, then 3X is Mathew's age now. If Y was Mathew's age, then Mathilda's age is presently Y also. We can write that $3X - Y = Y - X$. This equation becomes $Y = 2X$. From $3X + Y = 40$, we can say that $3X + 2X = 40$ and that $X = 8$. The difference of their ages is therefore $(3X - 2X)$ 8 years.

26. The two lines intersect at point (e, f). Solving equation $4X + 2 = -3X + 9$, we find that $X = 1$ and $Y = 6$ and thus that $e = 1$ and $f = 6$. The values of a and b are respectively 2 and 9 because they are the Y-intercepts of the two straight lines. The X-intercepts of the two lines (c and d) can be found by solving the equations $-3X + 9 = 0$ and $4X + 2 = 0$. We find $c = 3$ and $d = -1/2$. The value of $a + b + c + d + e + f$ is $(2 + 9 + 3 - 1/2 + 1 + 6)$ $41/2$.

	Past	Present	Future
Mathew	Y	3X	
Mathilda	X	Y	
Total		40	

27. The largest rectangular prism possible is a prism with a square base (see figure). From equation $X^2 + X^2 = 2^2$, we get $2X^2 = 4$ and $X = \sqrt{2}$. The total length of the edges of this prism is $(8 \times \sqrt{2} + 4 \times 3)$ $12 + 8\sqrt{2}$ cm.

